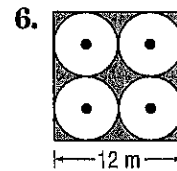
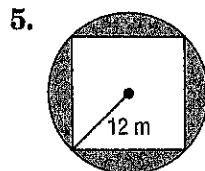
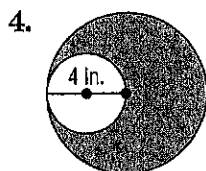
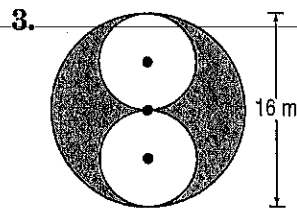
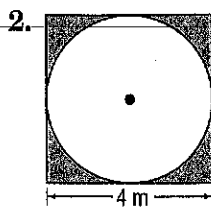
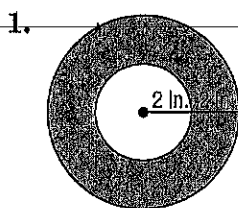


Find the area of each shaded region. Assume that all polygons are regular. Round to the nearest tenth.



Find the area of each shaded region. Assume that all polygons are regular. Round to the nearest tenth.

